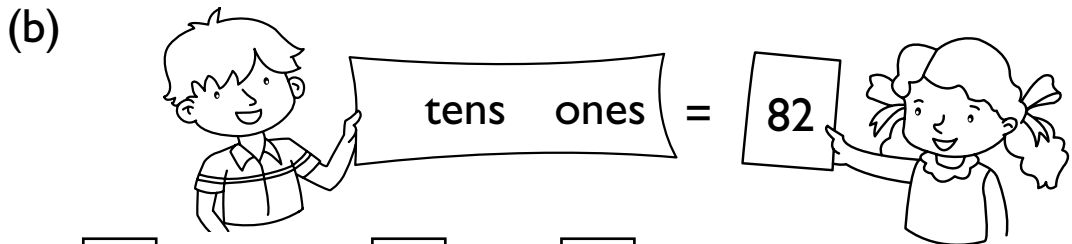
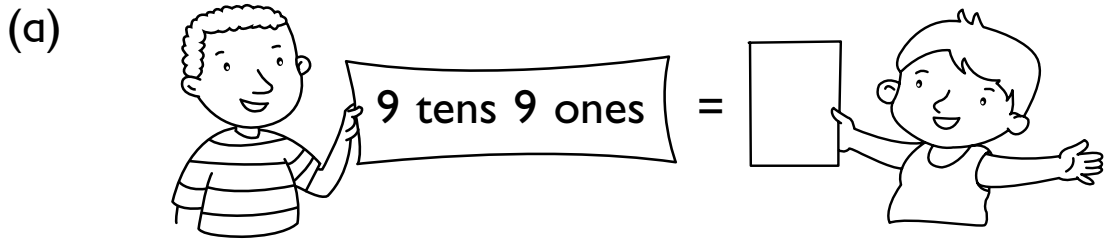


## REVIEW 2

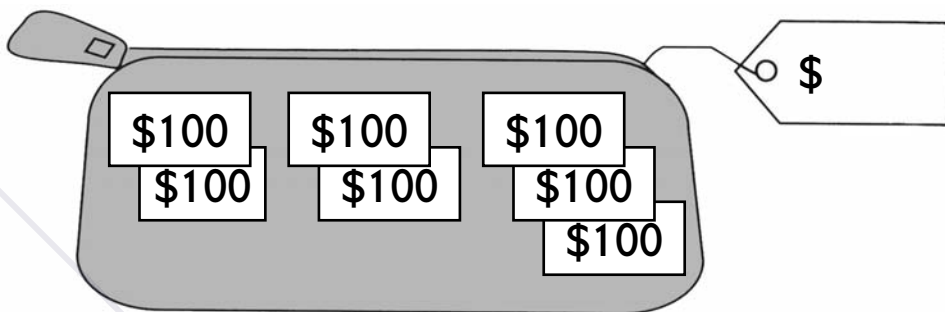
1. Write the missing numbers.



(c)  hundreds  tens  ones = 647

(d)  hundreds  tens  ones = 503

2. Write the amount of money.



3. Write the missing numbers.


(a)  $600 + \square = 630$       (b)  $500 + \square = 542$

(c)  $408 - \square = 400$       (d)  $750 - \square = 650$

## EXERCISE 4

- Fill in the blanks with **in.**, **ft** or **yd**.
  - The length of a microwave is about 2 \_\_\_\_\_.
  - The length of a paper clip is about 1 \_\_\_\_\_.
  - The length of a classroom whiteboard is about 3 \_\_\_\_\_.
  - A pencil is about 7 \_\_\_\_\_ long.
  - Emma is about 3 \_\_\_\_\_ tall.
- A green rod is 2 yd long.  
A yellow rod is 2 m long.  
Which rod is longer? \_\_\_\_\_.

3.




- Draw a line 3 in. longer than AB.

- Draw a line 2 in. shorter than AB.

## EXERCISE 3

1. Complete the multiplication sentences.

(a)



$5 \times 3 =$

$3 \times 5 =$

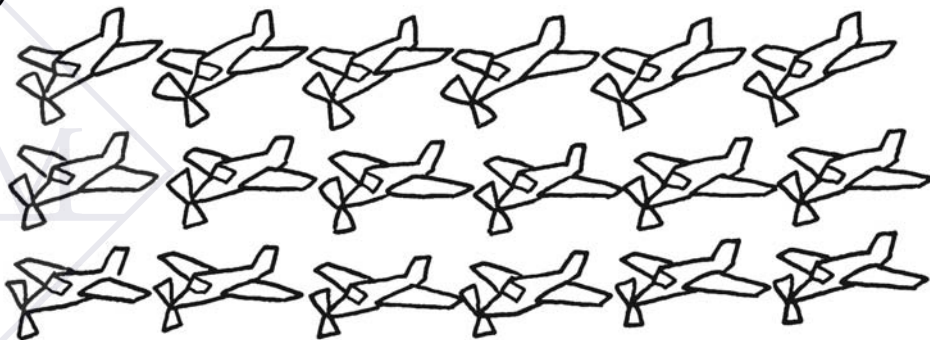
(b)



$7 \times 2 =$

$2 \times 7 =$

(c)



$6 \times 3 =$

$3 \times 6 =$