

PRACTICE A

Find the value of each of the following:

- | | (a) | (b) | (c) |
|----|-------------|-------------|-------------|
| 1. | $354 + 5$ | $147 + 21$ | $253 + 346$ |
| 2. | $865 - 3$ | $694 - 72$ | $484 - 43$ |
| 3. | $163 + 30$ | $267 + 300$ | $185 + 412$ |
| 4. | $588 - 60$ | $794 - 500$ | $385 - 161$ |
| 5. | $364 + 124$ | $856 - 354$ | $697 - 90$ |

6. After selling 245 buns, Mrs. Bates was left with 54 buns.
How many buns did she have at first?

7. In a class library, there are 568 English books and 204 Spanish books.
How many more English books than Spanish books are there?

8. Maria had 439 eggs.
She sold 326 of them.
How many eggs did she have left?

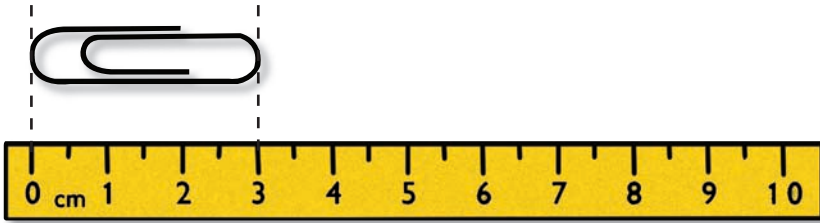


9. 768 people were at a football game.
532 of them were adults.
How many of them were children?

10. 104 boys and 125 girls took part in a swimming test.
(a) How many children took part in the test?
(b) How many more girls than boys were there?

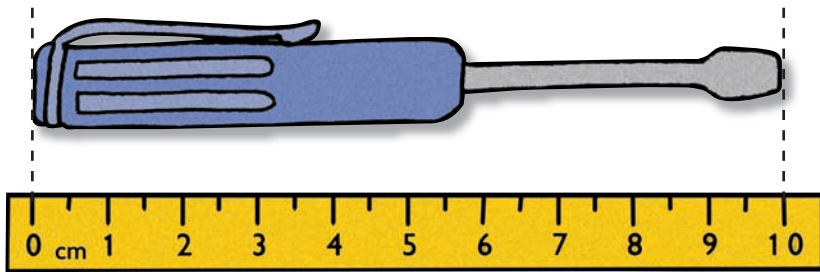
1. How many centimeters long are these things?

(a)




The paper clip is cm long.

(b)



The screwdriver is cm long.

2. Use your ruler to measure the length and width of your textbook.



The length is about cm.

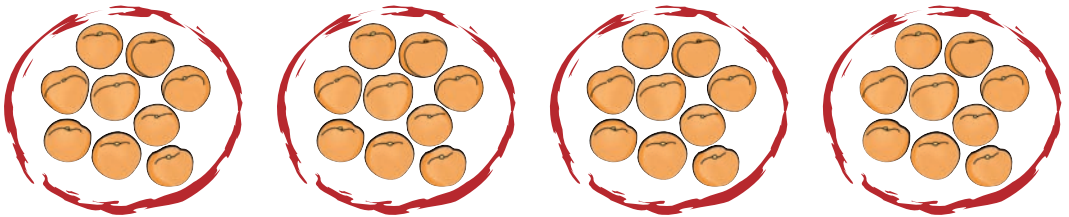
The width is about cm.

3. (a) Multiply 7 by 3.



$$7 \times 3 = \square$$

(b) Multiply 9 by 4.



$$9 \times 4 = \square$$

Exercise 2, pages 94-95

4. (a)



$$4 \times 2 = \square$$

$$2 \times 4 = \square$$

(b)



$$5 \times 3 = \square$$

$$3 \times 5 = \square$$

Exercise 3, pages 96-97