


CFL WEST

(CANADIAN FOOTBALL LEAGUE)



Draw a line to the correct province.

• ALBERTA

• BRITISH COLUMBIA

• MANITOBA

• SASKATCHEWAN

Write the team name next to the correct star.

- BC Lions
- Calgary Stampeders
- Edmonton Eskimos
- Saskatchewan Roughriders
- Winnipeg Blue Bombers

What city is home to the BC Lions?

What city is home to the Saskatchewan Roughriders?

Which province has two teams?



MIB

AMERICAN LEAGUE EAST



Write the team name next to the correct star.

AL East

- Baltimore Orioles
- Boston Red Sox
- New York Yankees
- Tampa Bay Rays
- Toronto Blue Jays

Which team is in Canada?

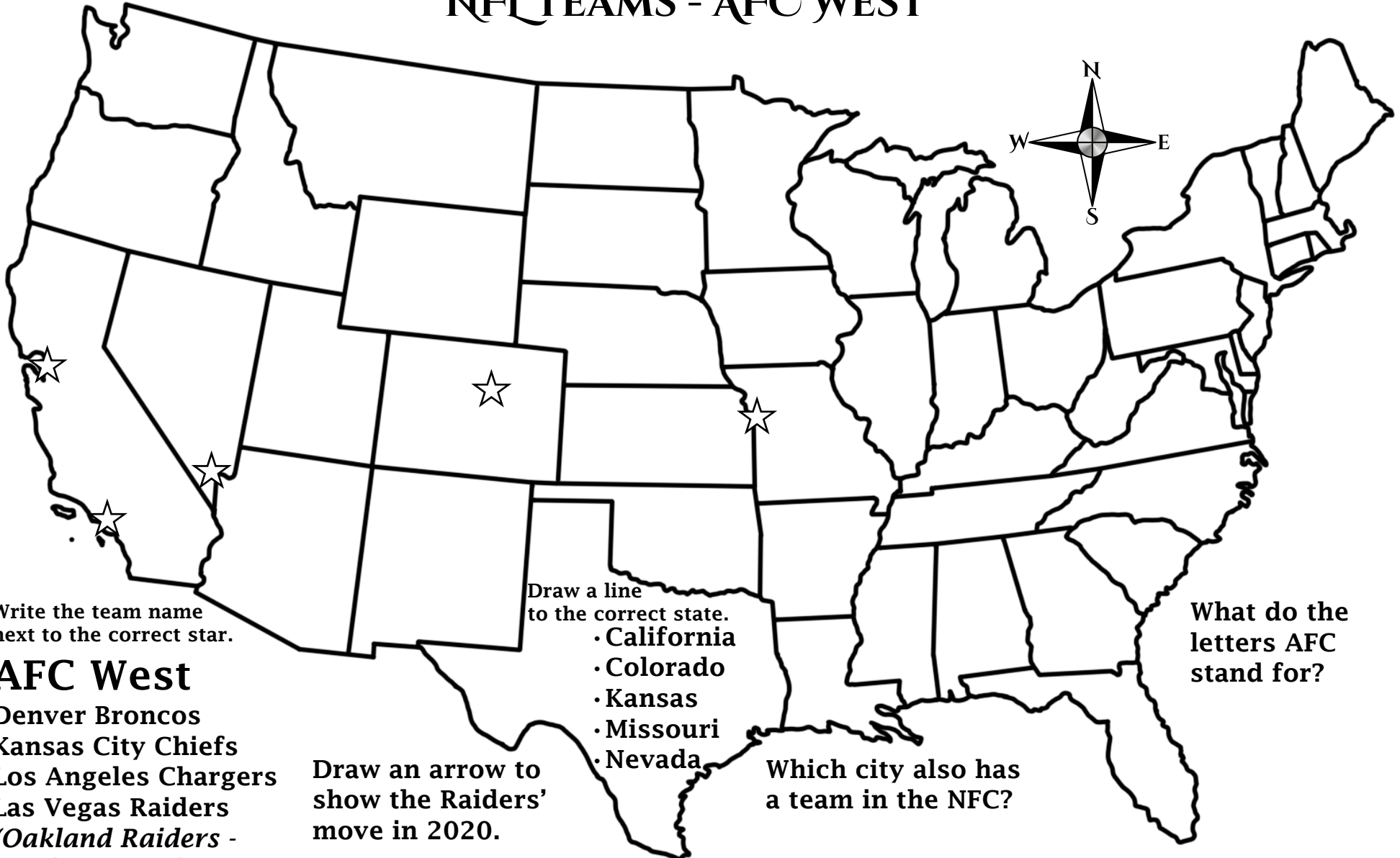
Which team has the farthest to travel?

Which city has the same name as its state?

Draw a line to the state or province.

- Florida
- Maryland
- Massachusetts
- New York
- Ontario

NFL TEAMS - AFC WEST



Write the team name next to the correct star.

AFC West

- Denver Broncos
- Kansas City Chiefs
- Los Angeles Chargers
- Las Vegas Raiders
(Oakland Raiders - moving to LV in 2020)

Draw a line to the correct state.

- California
- Colorado
- Kansas
- Missouri
- Nevada

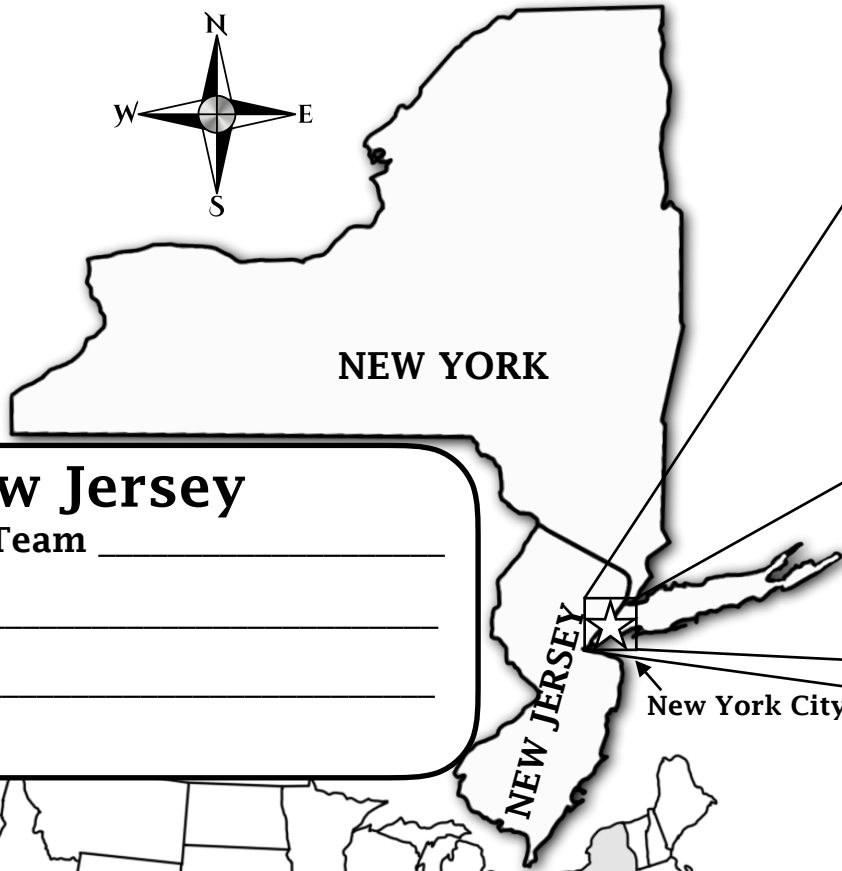

Draw an arrow to show the Raiders' move in 2020.

Which city also has a team in the NFC?

What do the letters AFC stand for?

NEW YORK & NEWARK NHL TEAMS

Draw a line to the star for each team.



New Jersey
 NHL Team _____
 Why _____



New York
 NHL Team _____
 Why _____

NHL Team _____
 Why _____

TORONTO TEAMS

Toronto
MLB Team _____
Why _____

NBA Team _____
Why _____

Toronto
NHL Team _____
Why _____

Toronto
CFL Team _____
Why _____

