

Unit 8 : Length

Friendly Notes

Comparing Length

We use these words to compare the lengths of two or more objects.

as long as

longer than

the longest

as short as

shorter than

the shortest

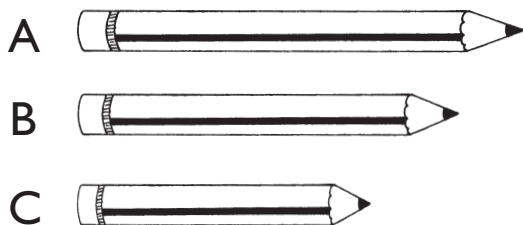
as tall as

taller than

the tallest

Do these pencils have the same length?

Let us compare their lengths.



Pencil A is **longer than** Pencil B and Pencil C.

Pencil A is the **longest**.

Pencil C is **shorter than** Pencil A and Pencil B.

Pencil C is the **shortest**.

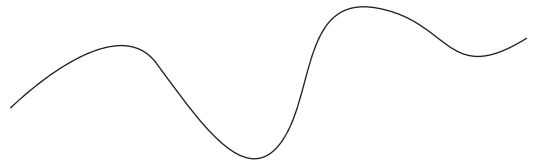
Exercise 1 : Comparing Length

1. Draw.

(a) Draw a longer pencil.



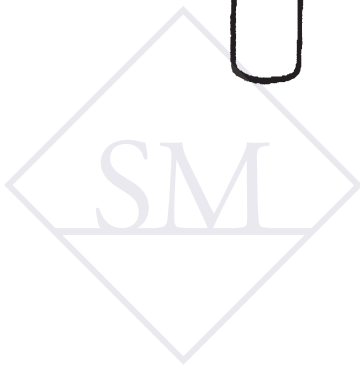
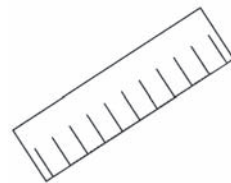
(b) Draw a shorter string.



(c) Draw a taller bottle.



(d) Draw a longer ruler.



Unit 18 : Numbers to 100

Friendly Notes

Counting

| | | | | | | | | | | |
|---------------------|-----|--------|--------|-------|-------|-------|---------|--------|--------|-------------|
| Number | 10 | 20 | 30 | 40 | 50 | 60 | 70 | 80 | 90 | 100 |
| Number words | ten | twenty | thirty | forty | fifty | sixty | seventy | eighty | ninety | one hundred |

Tens and Ones

62 = 6 tens 2 ones

74 = 7 tens 4 ones

98 = 9 tens 8 ones

We write 90 in words with an 'e': ninety



Write these numbers in words.

44 — forty-four

55 — fifty-five

62 — sixty-two

74 — seventy-four

98 — ninety-eight