

**Test
A****Unit 7: Addition and Subtraction****Chapter 3: Methods for Mental Subtraction**


1. 50 less than 270 is _____.
2. _____ is 30 less than 470.
3. 40 is _____ less than 165.
4. Subtract 32 from 45. The answer is _____.
5. Subtract 49 from 100. The answer is _____.
6. Subtract 99 from 400.

Write the missing number in the box.

$$\begin{array}{c} 400 - 99 = 300 + \boxed{} \\ \swarrow \quad \searrow \\ 300 \quad 100 \end{array}$$

7. What is 954 take away 97? _____.

4.



(a) The watermelon weighs _____ kg _____ g.

(b) The apple is _____ kg _____ g lighter than the watermelon.

(c) The total weight of the two fruits is _____ kg _____ g.

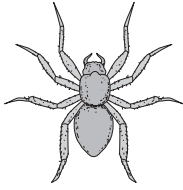
5. Write 345 in words.

6. Write $>$ or $<$ in the \bigcirc .

(a) 5×2 \bigcirc 3×4

(b) $15 \div 3$ \bigcirc $12 \div 2$

8.



A spider has 8 legs.

4 spiders have _____ legs.

A 4

C 12

B 11

D 32

9. Sally put 3 hamsters in 1 cage.

She has 18 hamsters.

She will need _____ cages for all her hamsters.

A 6

C 16

B 15

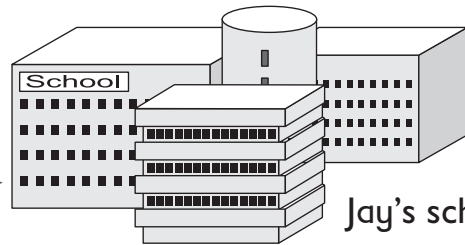
D 21

10.




Jay's house

590 m



Jay's school

859 m



Library

How much farther is Jay's house from the library than from his school?

A 269 m

C 360 m

B 349 m

D 369 m