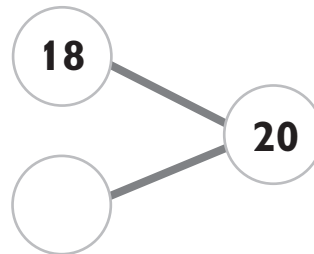


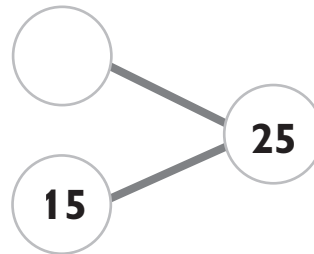
**Test
A****Unit 2: Addition and Subtraction****Chapter 1: Meanings of Addition and Subtraction**

1. Fill in the blanks.

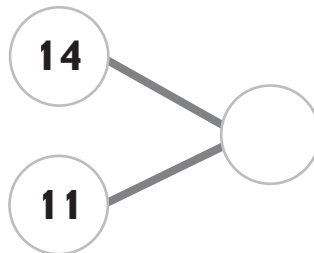
(a) $20 - 18 =$ _____



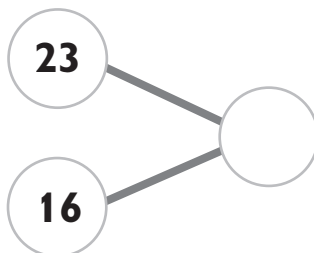
(b) $25 - 15 =$ _____



(c) $14 + 11 =$ _____



(d) $23 + 16 =$ _____



**Test
A****Unit 3: Length****Chapter 4: Measuring Length in Yards and Feet**

1. We write 'yd' for _____.
2. We write 'ft' for _____.
3. 1 yard = _____ feet
4. Joey's table is 1 yard long.
Sandy's table is 2 feet long.
 - (a) Whose table is longer? _____
 - (b) How much longer? _____ ft



Cumulative Test A Units 1–6

1. Write the numbers in words.

(a) 987 _____

(b) 444 _____

2. How many tens make 550? _____

3. Arrange the numbers in order.

Begin with the greatest.

901	109	911	199
-----	-----	-----	-----

_____, _____, _____, _____
greatest

4. What is the greatest number that can be made with the digits 0, 7 and 5? _____

5. Count backwards by 10's in a regular pattern.

710, 700, _____, 680, _____