

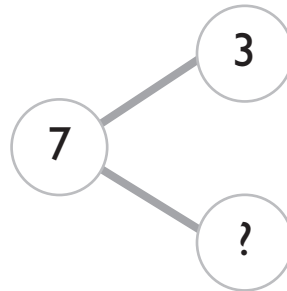
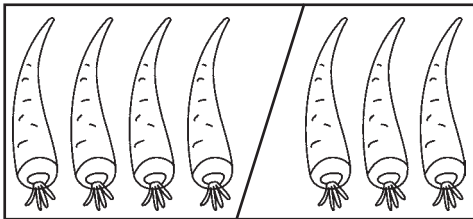
**Test
B****Unit 2: Number Bonds****Chapter 1: Making Number Stories**

Circle the correct option, **A**, **B**, **C** or **D**.

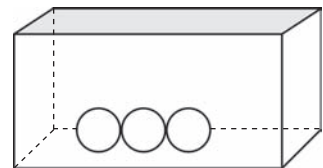
1. ● ● ● ● and ● ● make _____.

A 3**C** 6**B** 5**D** 7

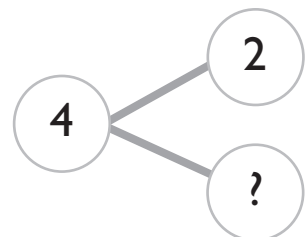
2. What is the missing number?

**A** 3**C** 5**B** 4**D** 6

3. How many marbles does Tom have to place in the box to make 10?

A 5**C** 7**B** 6**D** 8

4. What is the missing number?


A 2**C** 4**B** 3**D** 5

Cumulative Test A

Units 1-2

1. How many balls are there?


Check the correct answer.




Four Five Eight

2. How many clowns are there?



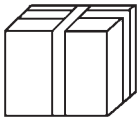

Write the number in words.



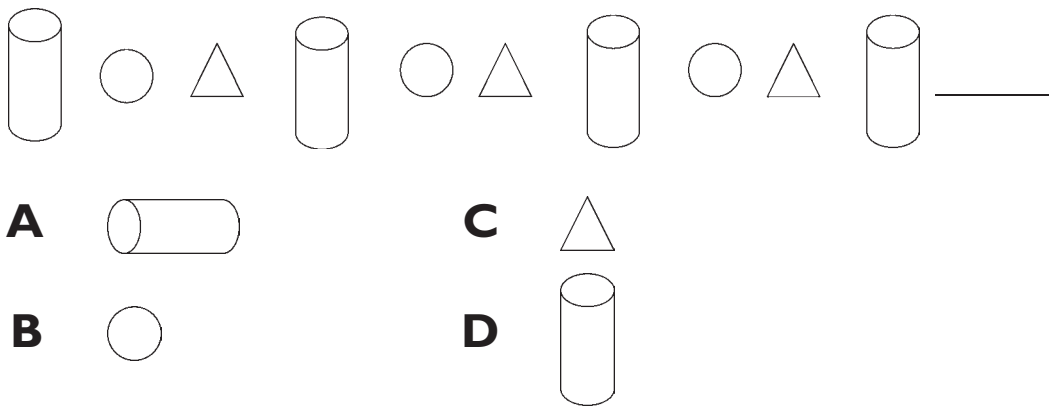
3. Color the correct number of cups.



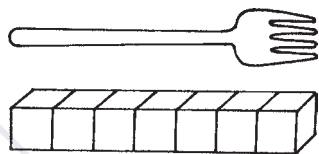
9. Which one of these objects has flat surfaces **only**?

- | | | | |
|----------|---|----------|---|
| A |  | C |  |
| B |  | D |  |

10. These objects are placed in a regular pattern. Which object comes next?







11. The fork is about _____  long.



- | | | | |
|----------|---|----------|---|
| A | 5 | C | 7 |
| B | 6 | D | 9 |

12. Which straw is the longest?

- | | | | | | |
|----------|---------|----------|---------|---|----------|
| A | Straw P | C | Straw R |  | P |
| B | Straw Q | D | Straw S |  | Q |
| | | | |  | R |
| | | | |  | S |