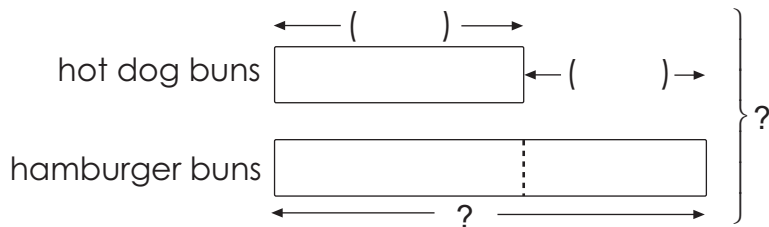
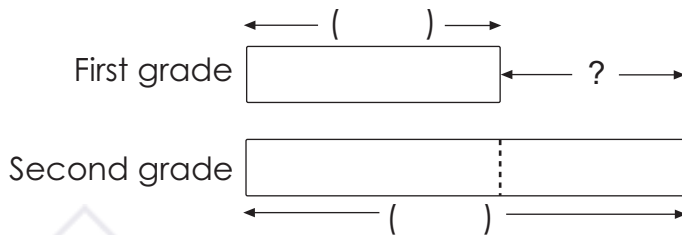


2. For a children's party, Mrs. Lee bought 36 hot dog buns and 24 more hamburger buns than hot dog buns.
- (a) How many hamburger buns did she buy?
- (b) How many buns did she buy in all?




- (a) She bought _____ hamburger buns.
- (b) She bought _____ buns in all.

3. There are 156 first grade students and 205 second grade students in an elementary school. How many more second grade than first grade students are there?



There are _____ more second grade than first grade students.

11.




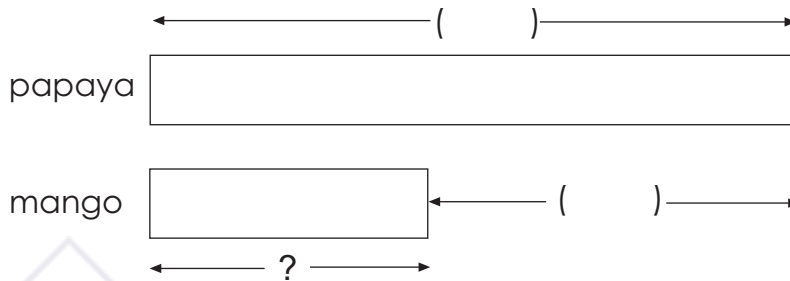
Each \triangle weighs 1 lb. The rock weighs _____ lb.

WORD PROBLEMS

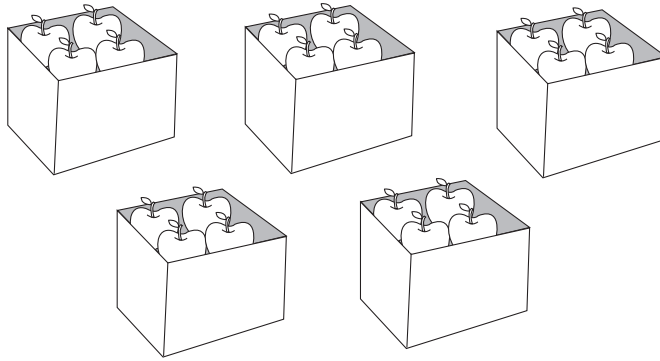


Solve these problems. Show your work clearly.

1. A papaya weighs 915 g. It is 530 g heavier than a mango. What is the weight of the mango?




3. Look at the pictures. Fill in the blanks.



- (a) There are _____ boxes.
- (b) There are _____ apples in each box.
- (c) There are _____ apples altogether.
- (d) 5 fours = _____ groups of _____
 = _____ × _____
 = _____ + _____ + _____ + _____ + _____
 = _____

4. Look at the pictures. Fill in the blanks.



- (a) There are _____ bags.
- (b) There are _____ carrots in each bag.
- (c) There are _____ carrots altogether.
- (d) 3 eights = _____ groups of _____
 = _____ × _____
 = _____ + _____ + _____
 = _____