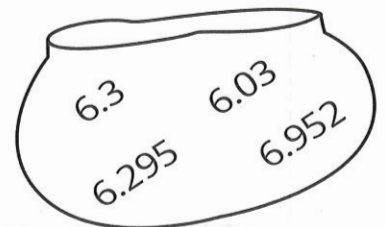


## EXERCISE 12

- Circle the greater number in each set.
  - 4.602, 4.7                      (b) 9.1, 9.05
  - 1.924, 1.828                      (d) 5, 0.52
- Circle the greatest number in each set.
  - 24.68, 264.8, 64.82, 624.8
  - 5.073, 5.73, 5.307, 5.037
  - 0.042, 0.109, 1.1, 0.91
- Write  $>$  (is greater than),  $<$  (is less than) or  $=$  (is equal to) in each 
  - 8.26  8.206
  - 7.001  7.1
  - 10.81  10.810
  - 9.345  9.306
  - 6.34  6.304
  - 6.002  6.200
- Arrange the set of numbers in increasing order.

2.8     2.128     2.18     2.218

- Arrange the set of numbers in decreasing order.



# EXERCISE 24

1. Subtract.

$\begin{array}{r} 4.91 \\ - 2. \quad ; \\ \hline \end{array}$	$\begin{array}{r} 8 \\ - 4.92 \\ \hline \end{array}$	$\begin{array}{r} 0.9 \\ - 0.47 \\ \hline \end{array}$	$\begin{array}{r} 12.05 \\ - 7.4 \\ \hline \end{array}$
T	E	H	U
$\begin{array}{r} 9.4 \\ - 4.73 \\ \hline \end{array}$	$\begin{array}{r} 1.38 \\ - 0.6 \\ \hline \end{array}$	$\begin{array}{r} 16.42 \\ - 9.18 \\ \hline \end{array}$	$\begin{array}{r} 3 \\ - 1.63 \\ \hline \end{array}$
R	P	C	S
$\begin{array}{r} 11.76 \\ - 4.38 \\ \hline \end{array}$	$\begin{array}{r} 10.06 \\ - 5.9 \\ \hline \end{array}$	$\begin{array}{r} 15 \\ - 6.04 \\ \hline \end{array}$	$\begin{array}{r} 10.6 \\ - 3.82 \\ \hline \end{array}$
I	G	O	N

**What birds cannot fly?**

Write the letters which match the answers.

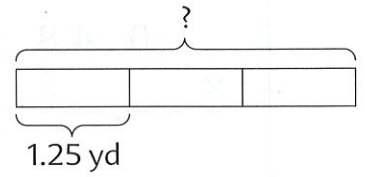
You will find two of them.

0.78	3.08	6.78	4.16	4.65	7.38	6.78

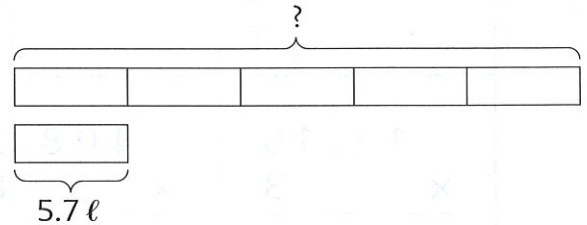
8.96	1.37	2.35	4.67	7.38	7.24	0.43

## EXERCISE 32

1. Lynn bought 3 pieces of ribbon each 1.25 yd long.  
Find the total length of the ribbon.



- 
2. A bucket can hold 5.7 liters of water.  
A fish tank can hold 5 times as much water as the bucket.  
Find the capacity of the fish tank.



- 
3. Cameron saved \$2.50 a week for 6 weeks.  
How much did he save altogether?

