

8A Count to 120

How many rings are there?



Learn

© 2022 Marshall Cavendish Education Pte Ltd



Count by tens, then by ones.

10, 20, 21, 22, _____, _____



20 and 4 make _____.

There are _____ rings.

I read _____
as twenty-four.




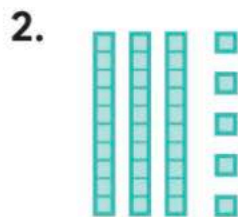
Learn Together



twenty-nine

20 and _____ make _____.

What is 1 more than 29?



thirty-five

30 and _____ make _____.

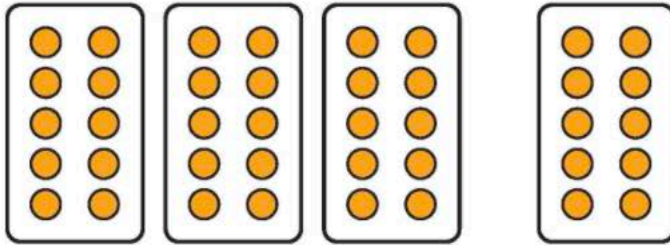
Count by tens, then by ones.

10, 20, _____, _____, _____,

_____, _____, _____



3.



40

forty

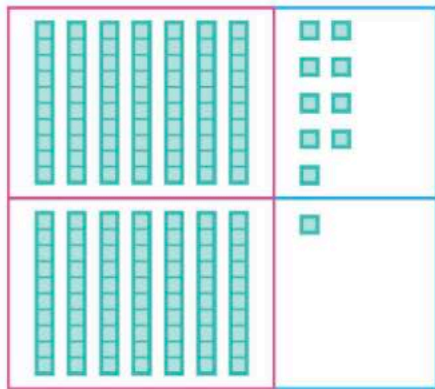
30 and _____ make _____.

4. Write the **numbers**.

Number	Word
21	twenty-one
	twenty-two
23	twenty-three
24	twenty-four
	twenty-five
26	twenty-six
	twenty-seven
	twenty-eight
	twenty-nine
30	thirty
31	thirty-one
	thirty-two
33	thirty-three
	thirty-four
35	thirty-five
	thirty-six
37	thirty-seven
	thirty-eight
39	thirty-nine
40	forty

Learn Together

1. Which is less, 79 or 71?



Tens	Ones
7	9
7	1

The number of tens are equal.
Compare the ones.



1 one is less than 9 ones.
71 is less than 79.

71 ○ 79

79 is greater than 71.

_____ > _____



2. Order the numbers from greatest to least.

Tens	Ones
5	4
6	1
5	9

_____ tens are more than _____ tens.

_____ is the greatest.

The tens in 54 and 59 are equal.
Compare the ones.

4 ones ○ 9 ones



_____ < _____

_____ is the least.

_____, _____, _____
greatest _____ least

Activity!

MODEL Use $\overset{6}{\text{6}}\overset{7}{\text{7}}$ to make a 2-digit number.

Compare your number with your classmate's number.

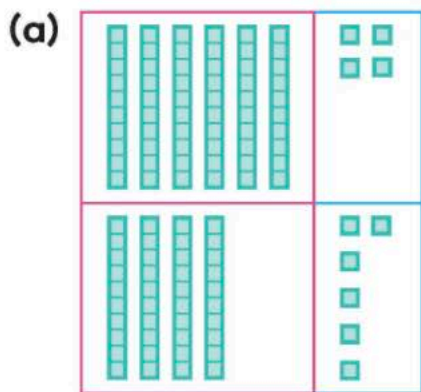
Use the words below to compare the numbers.

greater than less than
more than equal



Practice On Your Own

I. Write $<$, $=$, or $>$.



$$64 \bigcirc 46$$

(b)

Tens	Ones
9	2
9	5

$$92 \bigcirc 95$$