

# Addition & Subtraction Drills

Grades 1-3

Written by Nancy Wilson  
Illustrated by S&S Learning Materials

ISBN 978-1-55035-753-0

Copyright 2004

Revised June 2007

All Rights Reserved \* Printed in Canada


## Permission to Reproduce

Permission is granted to the individual teacher who purchases one copy of this book to reproduce the student activity material for use in his/her classroom only. Reproduction of these materials for an entire school or for a school system, or for other colleagues or for commercial sale is **strictly prohibited**. No part of this publication may be transmitted in any form or by any means, electronic, mechanical, recording or otherwise without the prior written permission of the publisher. "We acknowledge the financial support of the Government of Canada through the Book Publishing Industry Development Program (BPIDP) for this project."

Published in the United States by:  
On The Mark Press  
3909 Witmer Road PMB 175  
Niagara Falls, New York  
14305  
[www.onthemarkpress.com](http://www.onthemarkpress.com)

© On The Mark Press • S&S Learning Materials

Published in Canada by:  
S&S Learning Materials  
15 Dairy Avenue  
Napane, Ontario  
K7R 1M4  
[www.sslearning.com](http://www.sslearning.com)



Name: \_\_\_\_\_













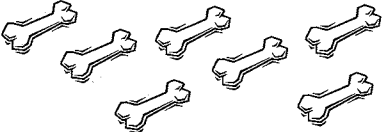
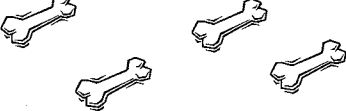


Skill:

# Picture Addition

Start With

Add On


All Together

Number of Problems: 8

Number Correct: \_\_\_\_\_

Time to complete: \_\_\_\_ min.



Name: \_\_\_\_\_

Skill:

# Addition Sentences

Count the pictures in each group. Write the number on the line under each group. Then add the two groups and write the answer in the box.




\_\_\_\_\_

+



\_\_\_\_\_

=



\_\_\_\_\_

+



\_\_\_\_\_

=



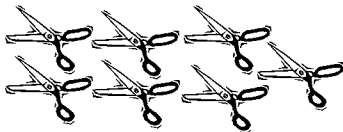
\_\_\_\_\_

+




\_\_\_\_\_

=



\_\_\_\_\_

+



\_\_\_\_\_

=




\_\_\_\_\_

+




\_\_\_\_\_

=



\_\_\_\_\_

+




\_\_\_\_\_

=

Number of Problems: 6

Number Correct: \_\_\_\_\_

Time to complete: \_\_\_\_ min.


















Name: \_\_\_\_\_


Skill:

# Quick Addition Drill

Solve the problems inside the baby dino, then color each one.



Number of Problems: 15    Number Correct: \_\_\_\_\_    Time to complete: \_\_\_\_\_ min.



Name: \_\_\_\_\_

Skill:

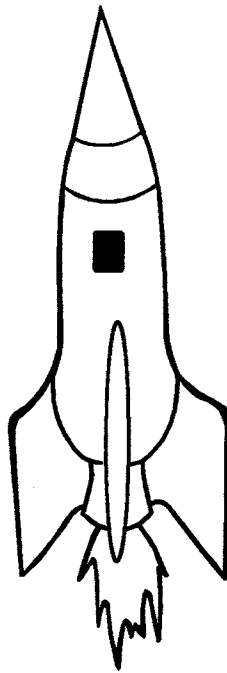
# Rocket Ship Math

**+3**

0	
4	
2	
9	
1	
3	

**+1**

7	
2	
5	
0	
1	
4	



**+4**

6	
2	
1	
4	
3	
0	

**+5**

1	
9	
0	
3	
5	
2	

Number of Problems: 24    Number Correct: \_\_\_\_\_    Time to complete: \_\_\_\_ min.